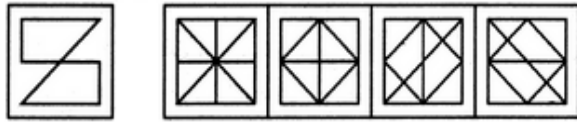
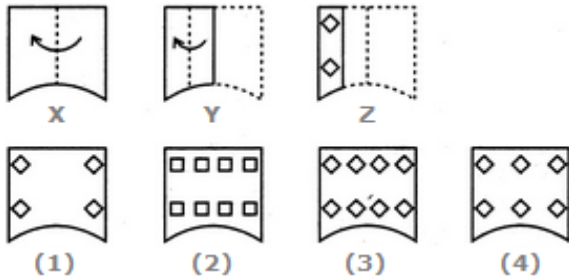


Find out the alternative figure which contains figure (X) as its part



- (X) (1) (2) (3) (4)
- (a) (1) (b) (2)
(c) (3) (d) (4)

Choose a figure which would most closely resemble the unfolded form of Figure (Z).

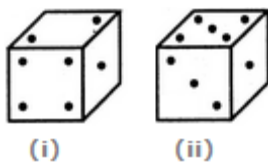


- (1) (2) (3) (4)
- (a) (1) (b) (2)
(c) (3) (d) (4)

In a certain code, TRIPPLE is written as SQHOOKD, how will DISPOSE be written in that code?

- (a) EJTQPTF (b) EJTQPTG
(c) CHRPNRD (d) CHRONRD

Two positions of a dice are shown below. When the number 4 will be at the bottom, then which number will be at the top?



- (i) (ii)
- (a) 3 (b) 5
(c) 6 (d) Cannot be determined

If A + B means A is the sister of B; A x B means A is the wife of B, A % B means A is the father of B and A - B means A is the brother of B. Which of the following means T is the daughter of P?

- (a) P x Q % R + S - T (b) P x Q % R - T + S
(c) P x Q % R + T - S (d) P x Q % R + S + T

Choose the word which is different from the rest.

- (a) Diarrhoea (b) Jaundice
(c) Measles (d) Cholera

Architect : Building :: Sculptor : ?

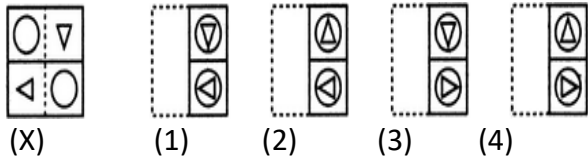
- (a) Museum
- (c) Chisel

- (b) Stone
- (d) Statue

In a certain code ROSE is coded as 6821, CHAIR is coded as 73456 and PREACH is coded as 961473, how will SEARCH be coded in that language?

- (a) 246173
- (c) 214763
- (b) 214673
- (d) 216473

Find out from amongst the four alternatives as to how the pattern would appear when the transparent sheet is folded at the dotted line.



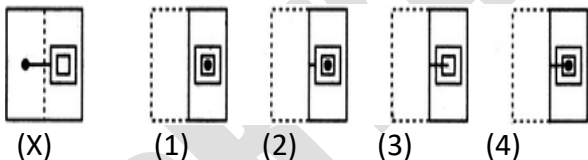
- (a) (1)
- (c) (3)
- (b) (2)
- (d) (4)

Find out the alternative figure which contains figure (X) as its part



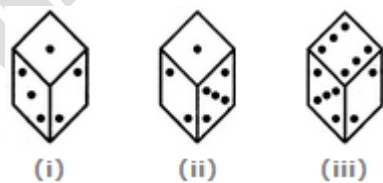
- (a) (1)
- (c) (3)
- (b) (2)
- (d) (4)

Find out from amongst the four alternatives as to how the pattern would appear when the transparent sheet is folded at the dotted line.



- (a) (1)
- (c) (3)
- (b) (2)
- (d) (4)

Below are depicted the three different positions of a dice. Find the number of dots on the face opposite to the face with one dot.



- (a) 2
- (c) 4
- (b) 3
- (d) 6

A cube has six different symbols drawn over its six faces. The symbols are dot, circle, triangle, square,

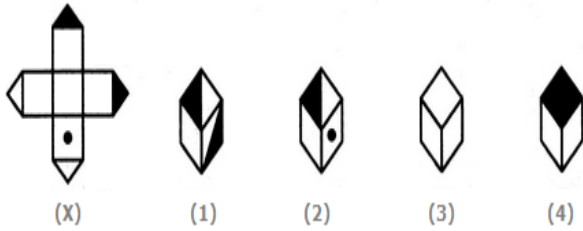
cross and arrow. Three different positions of the cube are shown in figures X, Y, and Z.

Which symbol occurs at the bottom of fig.(Y)?



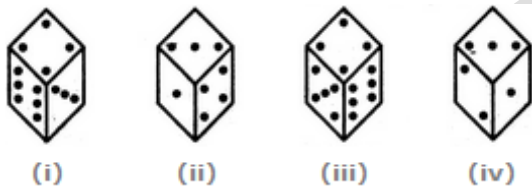
- (a) Arrow
- (b) Triangle
- (c) Circle
- (d) Dot

Choose the box that is similar to the box formed from the given sheet of paper (X).



- (a) 1 and 2 only
- (b) 2 and 4 only
- (c) 2 and 3 only
- (d) 1 and 4 only

How many dots are there on the dice face opposite the one with three dots?



- (a) 2
- (b) 4
- (c) 5
- (d) 6